

Name:

Grade:

Date:

## Match the right position of solar system planets

First planet -




**Earth**

Second planet -



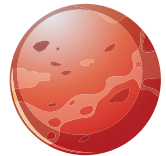
**Mercury**

Third planet -



**Neptune**

Fourth planet -



**Venus**

Fifth planet -



**Jupiter**

Sixth planet -




**Mars**

Seventh planet -



**Uranus**

Eighth planet -



**Saturn**